

Differentiation

Meeting the Needs of All Learners

Grades 6–8

Genni Steele

April 25, 2009

NCTM Annual—Washington

What is Differentiation?

Differentiation is instruction designed to meet differing learners' needs

AND

is a lens through which we can examine our teaching and our student's learning.

We need to develop new skills and be more adept at:

- **Identifying** the important mathematics
- **Assessing** what students know and how they learn
- **Creating, designing and modifying** tasks
- **Providing** the opportunity for student choice

Focus Categories:

- Casting a Wider Net
- Scaffolding Learning
- Supporting Choice

Casting a Wider Net

Transforming Tasks

When we expand tasks to allow access we do not want to undermine the integrity of the mathematical challenge.

Number Story:

Sabina and Mike ran each day this week. Each day Sabina ran 3.5 miles in 28 minutes. Mike ran 6 miles in 63 minutes every day.

Here are the answers: 35, 2.5, 245, 7.35

What could be the questions?

If I were...

I would be...

I would be...

But I would not be...

Because that would be...

Fraction Division

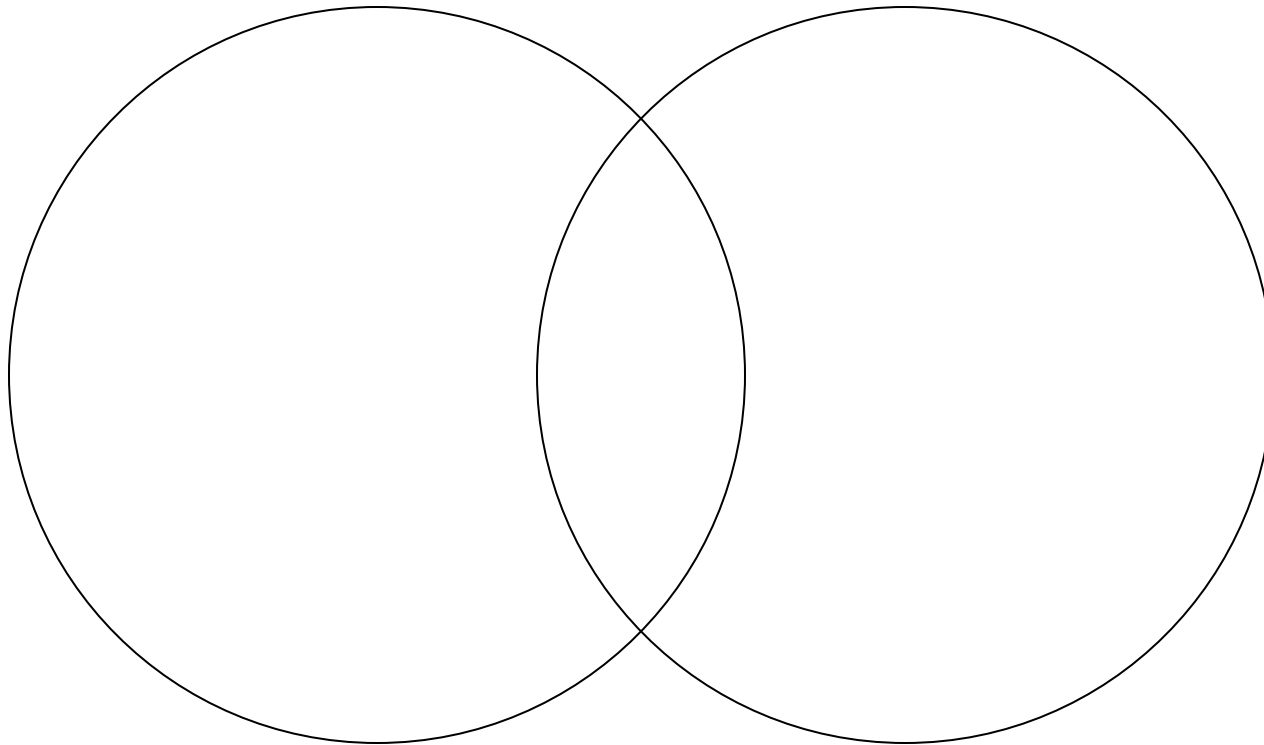
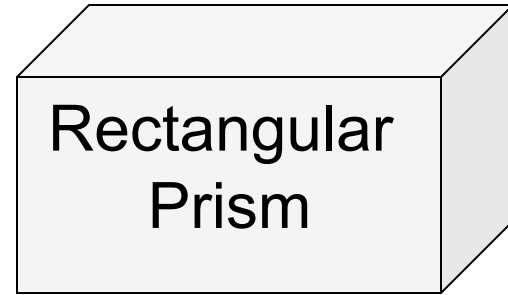
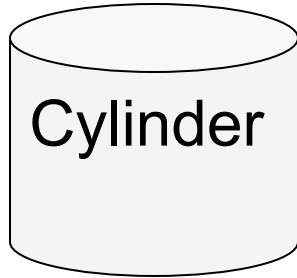
- Pick 5 examples whose quotient is less than 2 and explain how you know
- Pick one of the problems and write 4 different fraction division problems with the same remainder.

A family has 5 members. The mean age is 26.

How old could the family members be?

Scaffolding Learning

What can students do with support that they are not able to do on their own?



How are $y=2x$ and $y=x^2$ the same?
How are they different?

Alike	Different

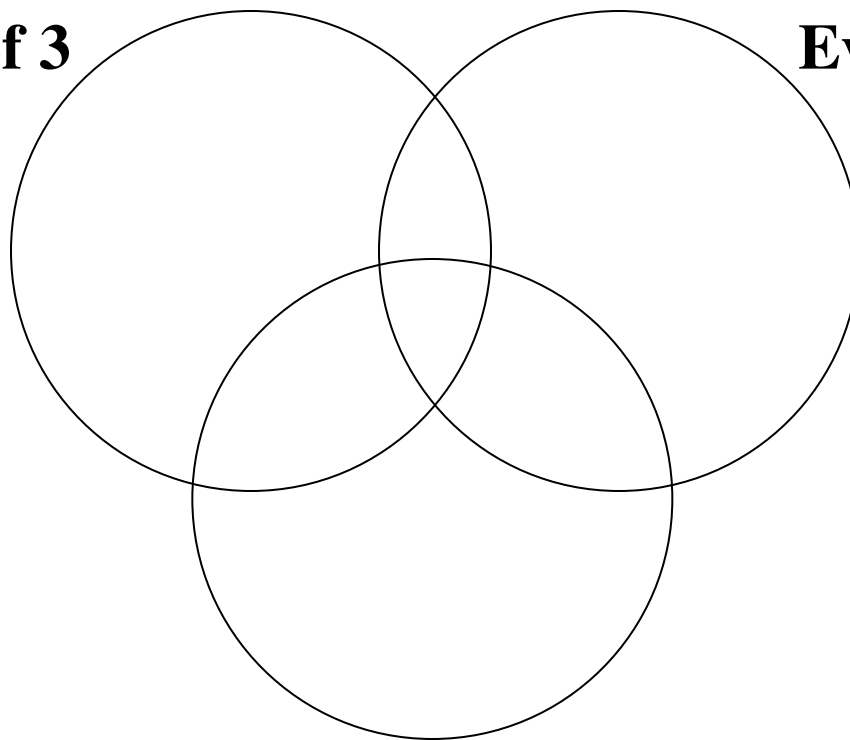
Word Bank

Coefficient, rate of change, slope,
linear, non-linear, y-intercept, quadratic,
exponent, y-axis, x-axis

Place the numbers 1–24 in the Venn Diagram

Multiples of 3

Even Numbers



Factors of 18

How are tables, graphs, and equations alike and different?

Tables and Graphs	
Alike	Different

Graphs and Equations	
Alike	Different

Tables and Equations	
Alike	Different

Supporting Choice

- Partners
- Work space
- Tasks
- Demonstrate understanding

Choose your numbers

There are _____ cups of milk in the refrigerator. $4 \frac{1}{2}$, $3 \frac{2}{3}$, $2 \frac{1}{4}$

It takes _____ of a cup to make frosting for one brownie recipe. $\frac{3}{4}$, $\frac{2}{3}$

How many batches of brownies can be frosted?

Choose your numbers

The price of basketball shoes are \$_____

They are marked down _____%

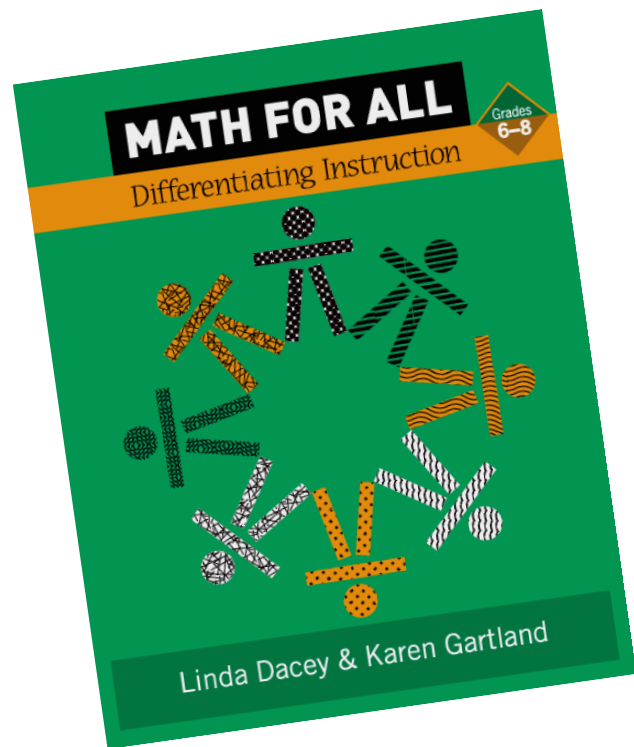
What is the sale price?

Demonstrate Understanding

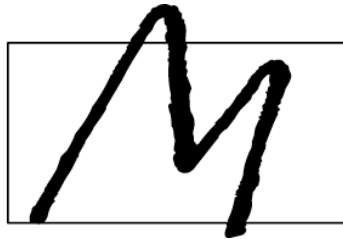
A Walking Race

- Zoe walks at rate of 1 meter per second.
- Darnell's rate is 2.5 meters per second.

Design a race that Zoe will win, however, only by a little bit.



Authors:
Linda Dacey
Karen Gartland



Math Solutions.®

www.mathsolutions.com

(800) 868-9092

info@mathsolutions.com

To download slides from this presentation, visit

www.mathsolutions.com/presentation